

Here is a clock.



Use the words to complete the sentences.

minute

hour

day

time

The shortest hand is the _____ hand.

The longest hand is the _____ hand.

Complete.

There are _____ minutes in an hour.

There are _____ minutes in a quarter of an hour.

There are _____ minutes in half an hour.

Match the clocks to the correct times.



9 o'clock



5 past 6



Half past 1



Quarter to 12

Order the times from shortest to longest.

1 hour
10 minutes

Three
quarters of
an hour

55 minutes

A

B

C

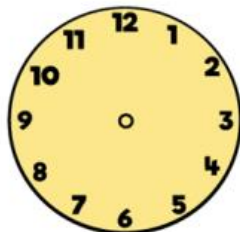
Shortest

Longest

Henry is walking from his house to school.

- The walk is 18 minutes long.
 - He arrives at 8 minutes past 8.
- What time does he leave the house?

Draw the time on the clock.



Circle am or pm for each statement.



It is five o'clock in the afternoon.

am

pm

I am eating my breakfast before school.



am

pm

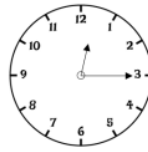
There are 24 hours in a day.
How many hours are in 3 days?

_____ hours

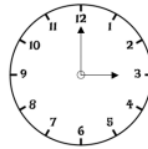
How many days is 120 hours?

_____ days

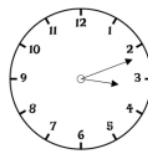
Match the analogue and digital clocks that show the same time.



15 : 00



12 : 15



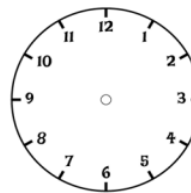
03 : 12

Complete the table.

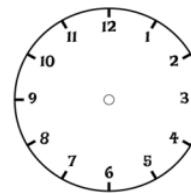
Month	Number of Days
March	
November	
	28 or 29

Jack sets off to the shop at twenty past nine.
He arrives at the shop 35 minutes later.

Draw the times on the clock faces.



Sets off

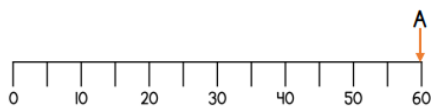


Arrives

Draw arrows to match the statements to the correct position on the number line.

One has been done for you.

A	B	C	D
Seconds in a minute	Minutes in half an hour	Hours in a day	Months in a year



Circle the times that match the time shown on the digital clock.

17 : 45

quarter to six in the evening

5:45 p.m.

5:45 a.m.

7:45 p.m.