

## Maths activity – 8.7.20

### Sharing

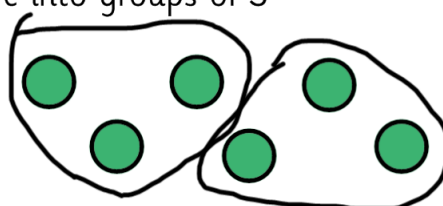
#### Should

Your child should share these into groups of the specified amount by circling them. They can then count how many groups there are to find the answer. The first has been done for them.

How many groups of 3 are there in 6?


2

Share into groups of 3




How many groups of 4 are there in 12?

Share into groups of 4



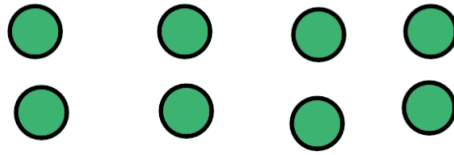
How many groups of 2 are there in 10?

Share into groups of 2




How many groups of 4 are there in 8?

Share into groups of 4




How many groups of 5 are there in 15?

Share into groups of 5



How many groups of 6 are there in 12?

Share into groups of 6



### Could

If your child would like a challenge, read them this word problem and ask them to explain their answer.

My chocolate bar has 12 pieces. I want to share it between 5 people. Can I share it fairly?