









## Maths activity – 30.6.20

Adding by counting on

### Should

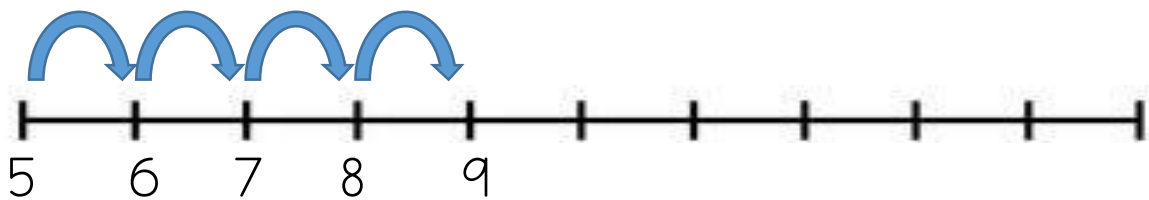
Your child should complete these additions by counting on from the first number by the number of spaces on the Numicon tile. The first one has been completed for them.

$4 + $ 	$= 6$
$6 + $ 	$=$
$9 + $ 	$=$
$3 + $ 	$=$
$8 + $ 	$=$
$12 + $ 	$=$
$15 + $ 	$=$
$7 + $ 	$=$

### Could

If your child would like a challenge, ask them to use these blank number lines to help them solve these additions. They will need to fill in the first number, count up the right number of spaces and mark where they got to before counting up again to work out where they have gotten to. Have a look at the first one for an example.

$$5+4=9$$



$$12+6=$$



$$7+7=$$



$$14+5=$$

