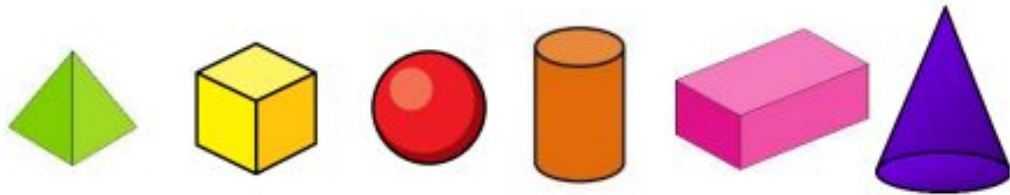


Match the shape to its name.



cube cylinder cuboid pyramid cone sphere

Complete the sentences to describe the model

There are _____ cuboids.


There are _____ cylinders.

There are _____ pyramids.


There are _____ cubes.



Circle the cubes. Tick the pyramids.



The bottom of a 3-D shape is hidden.



What shape could it be?

Explain how you know.