






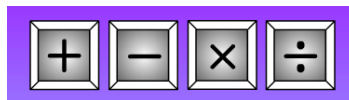
## Wednesday Maths

### Money Starter


I have . Which two items can I buy from the shop? Circle them.

			
6p	9p	13p	14p

### Recap of all four operations



What different words can you say for each one?



Which operations do you associate with greater/ more than?

Which operations do you associate with fewer/ less than?

## Activities (also linked to money)

Word problems with two steps. For each of these you will have to write two calculations. I have given you a clue for the first one!

- 1) A banana costs 10p and an apple costs 20p. Simon wants to buy both with his £1 coin – how much change would he receive?

$$\begin{array}{r} \square \\ \square \end{array} + \begin{array}{r} \square \\ \square \end{array} = \begin{array}{r} \square \\ \square \end{array}$$
$$\begin{array}{r} \square \\ \square \end{array} - \begin{array}{r} \square \\ \square \end{array} = \begin{array}{r} \square \\ \square \end{array}$$





- 2) A pineapple costs 60p. Lucy wants to buy 3. If she has £2 how much change will she get?

- 3) A pear costs 25p, a peach costs 20p and a nectarine costs 30p. Logan has four 5p coins. Which piece of fruit can he buy?

- 4) A mango costs 99p. Mohammed has a 50p coin, two 20p coins and two 5p coins. How much money does he pay and how much change does he get?

**Challenge** (you don't **need** to complete these- only if you have some extra time)

Sara has £1. She goes to the shop

Chocolate Bar 	50p
Notepad 	30p
Book 	60p
Crayons 	90p

and everything is **half price!** She buys **two** things and gets 45p change. What did she buy?

### **Plenary**

In the shop above Sacha has £2 to spend. What could she buy? Write different calculations to show what she could have bought.