

Tuesday Maths Session

Time Starter

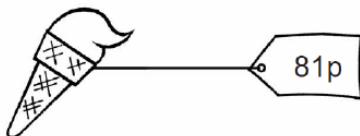
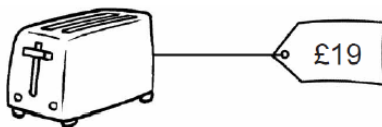
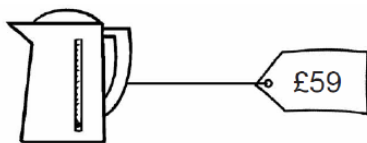
How many minutes are there in an hour?

How many hours are there in a day?

To combine different coins or notes to make a total

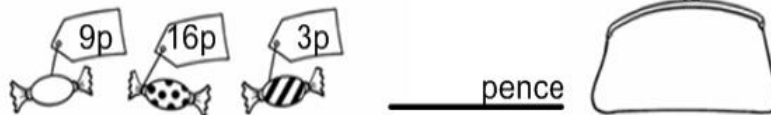
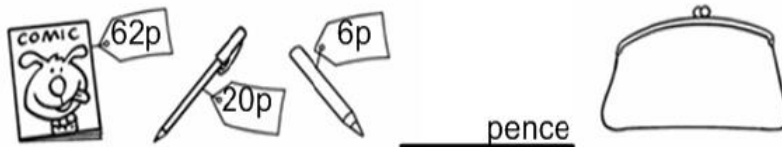
Recap of Money

Draw the coins or notes that you would use to pay for these items. Try and use the smallest number of coins or notes available (eg not 81 1ps for the ice cream)!



Activity

Write down the totals in the middle then draw the fewest number of coins or notes that you can to make the total.



Challenge

I have two coins in one hand and three in the other hand. Each hand is of equal value.

What could the coins be?

Can you find different possibilities? Can you find **all** the possibilities?

Plenary

Zara says,



I have 63p in silver coins.

Do you agree?
Explain why.